

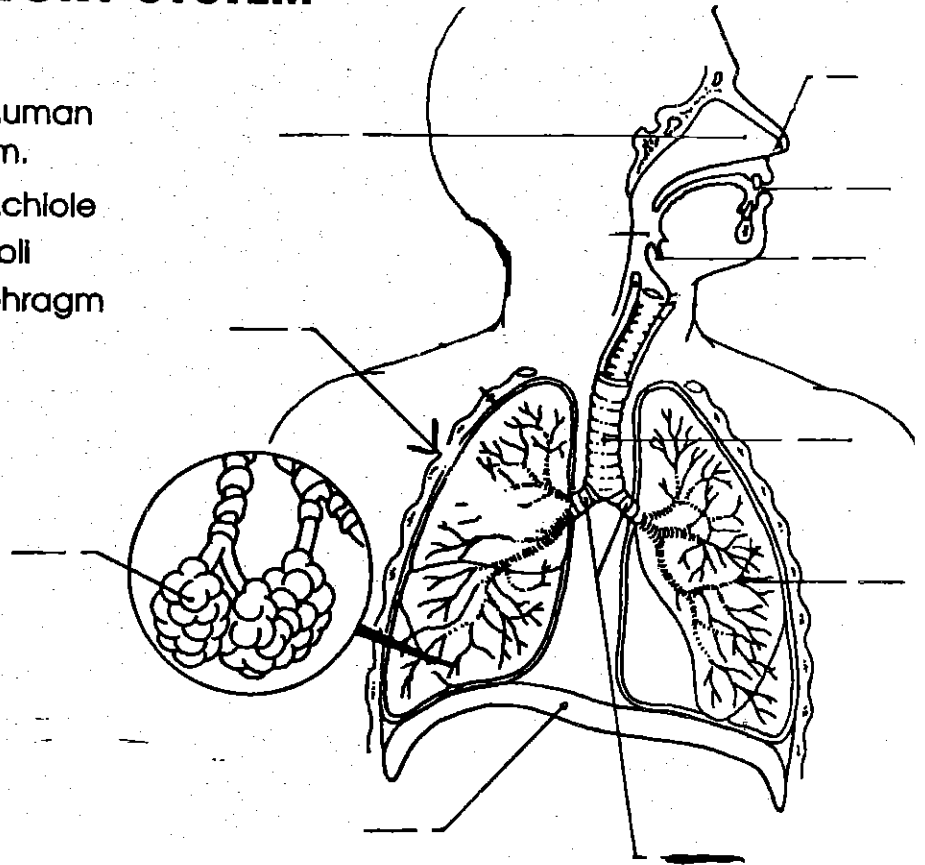
THE HUMAN RESPIRATORY SYSTEM

Name _____

Respiratory System

Label the following parts of the human respiratory system on the diagram.

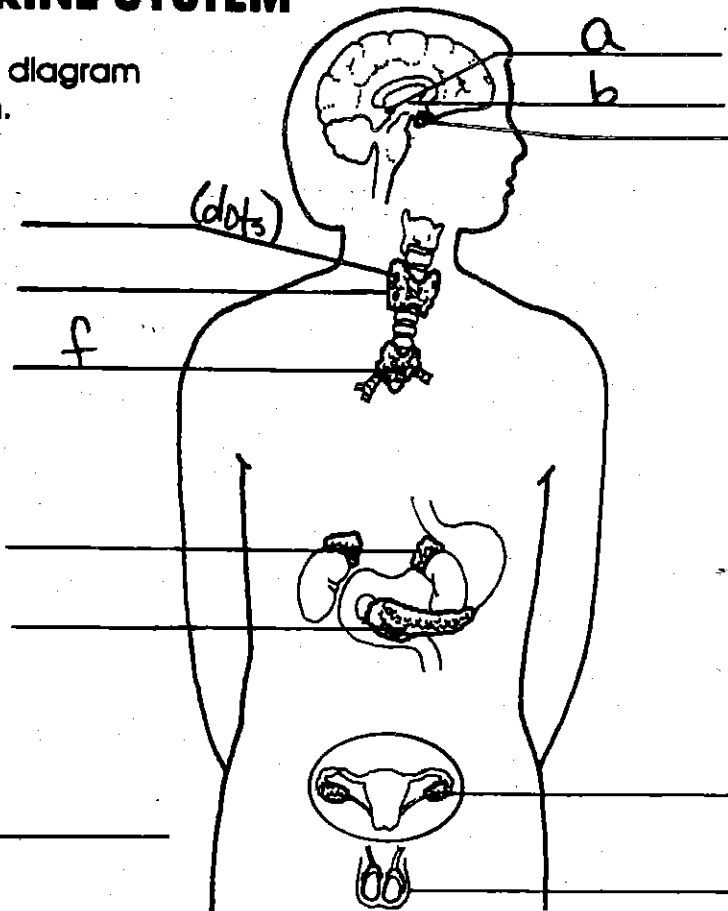
- a. nasal passage
- b. nostrils
- c. mouth
- d. epiglottis
- f. trachea
- g. bronchi
- h. bronchiole
- i. alveoli
- j. diaphragm
- k. lung



THE HUMAN ENDOCRINE SYSTEM

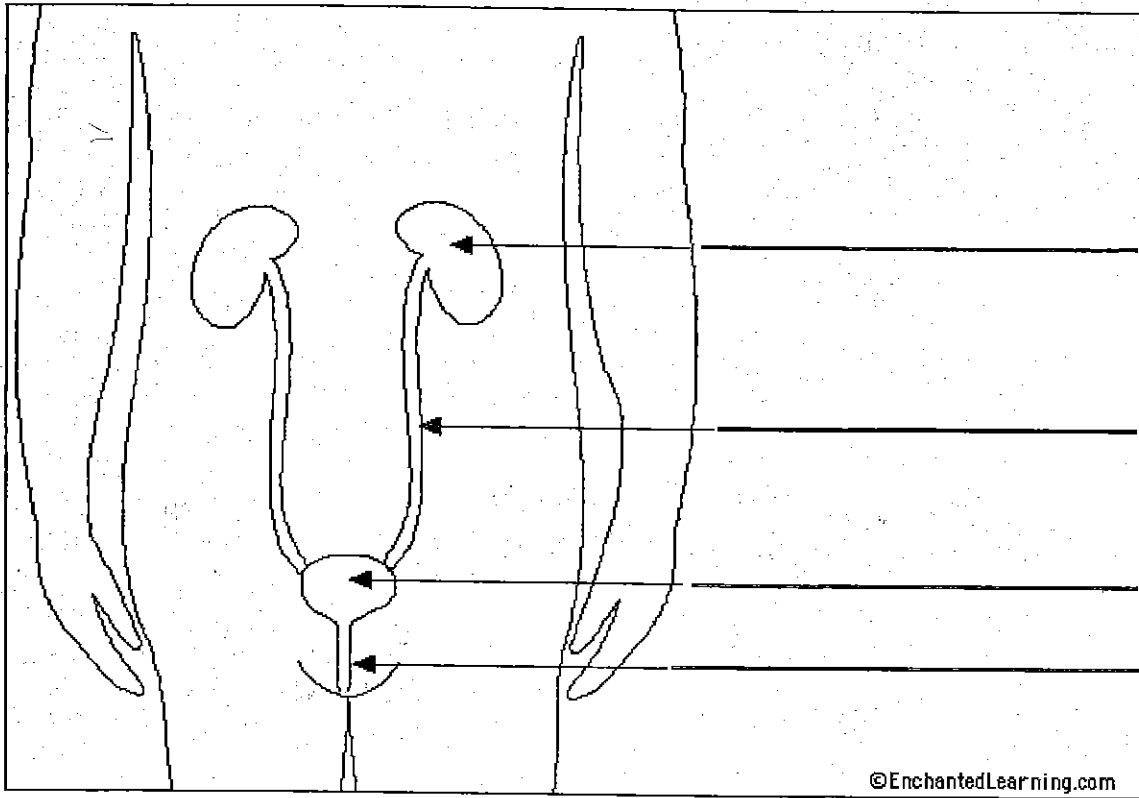
Label the following parts on the diagram of the human endocrine system.

- c. pituitary
- d. thyroid
- e. parathyroids
- g. adrenal
- h. pancreas
- i. ovary (female)
- j. testis (male)



Name: _____ Period: _____ QUIZ

Name: _____ Period: _____



Label the diagram above using these words: **ureter, kidney, bladder, urethra.**

Word Bank for below:

urine urea toxic nephrons excreted reabsorption
salts excess water reabsorbed

5. The kidneys are made up of millions of filtering units called _____
6. Failure to eliminate waste can cause a _____ build up.
7. The waste eliminated by the kidney includes _____, which is made up of _____ and _____.
8. The rate of _____ depends on how much fluid your body needs. For example, if you just drank 3 glasses of water, more water will likely be _____ by your urinary system.